





Name _____

Date _____

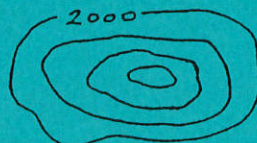
WATERSHED WOES QUIZ 2

Matching: Select the best answer.

- | | | | |
|-----------|---|----|---|
| 1. _____ | Blue color | A. | downstream |
| 2. _____ | Primary road | B. | steep slopes |
| 3. _____ | Sinkhole | C. | upstream |
| 4. _____ | Purple color | D. | water |
| 5. _____ | Power transmission lines | E. | gravel, sand, open area |
| 6. _____ | Closely spaced contour lines | F. | valleys |
| 7. _____ | V-shaped contour lines | G. | revisions |
| 8. _____ | Unimproved road | H. | rough, rugged country |
| 9. _____ | Building | I. |  |
| 10. _____ | Green color | J. | forests |
| 11. _____ | Brown color | K. | ridges |
| 12. _____ | U-shaped contour lines | L. |  |
| 13. _____ | V's formed by contour lines crossing a stream point _____ | M. | ===== |
| 14. _____ | Secondary highway | N. |  f i |
| 15. _____ | Irregular contour lines | O. | _____ |
| 16. _____ | Railroad track | P. | _____ . |
| 17. _____ | Light duty road | Q. | _____ |
| 18. _____ | Hill | R. | ===== |
| | | S. |  |

Complete:

19. Determine highest possible elevation for the illustration below if the contour interval is 100 feet:



WATERSHED WOES QUIZ 2
(continued)

20. What is a watershed?

Match the following:

